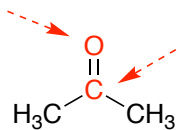
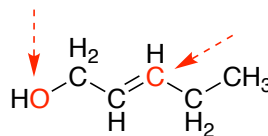


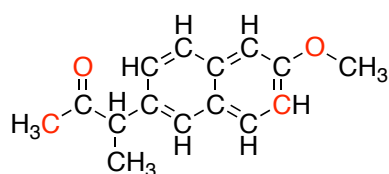
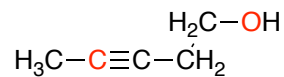
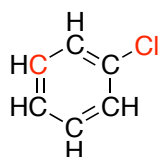
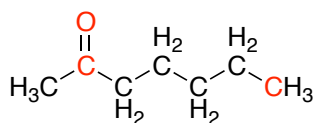
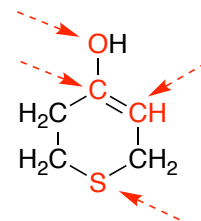
Indicate the hybridization states of the red atoms in the molecules below.



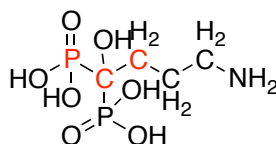
*acetone*



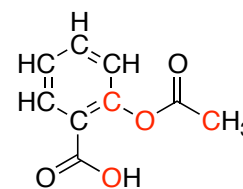
*cis-1-hydroxy-2-butene*



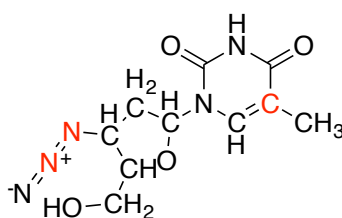
*naproxen*



*alendronate*



*aspirin*



*zidovudine (AZT)*