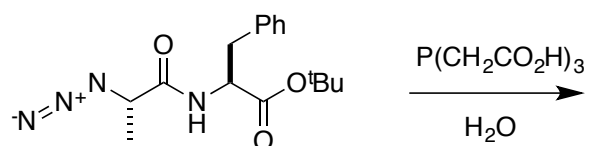
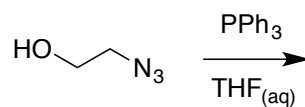
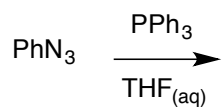


Draw the products of the following reactions.



Draw the intermediate in the following reaction, and superimpose curly arrows on it to express electron flow that implies how the final product can form.



*aminal*

The alcohol protecting group in the last reaction, *azidoethyl / azidomethyl*, is one frequently used in sequencing by synthesis approaches.